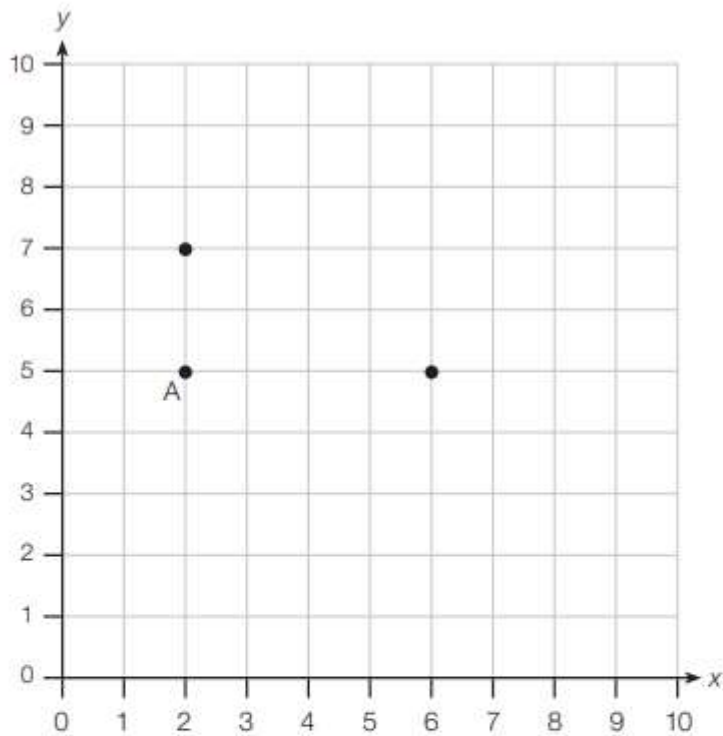


Reasoning questions

#

1.



Zoe plots a point to complete the rectangle.

What is the co-ordinate of the final point?

1 mark

2.

Complete the sequences.

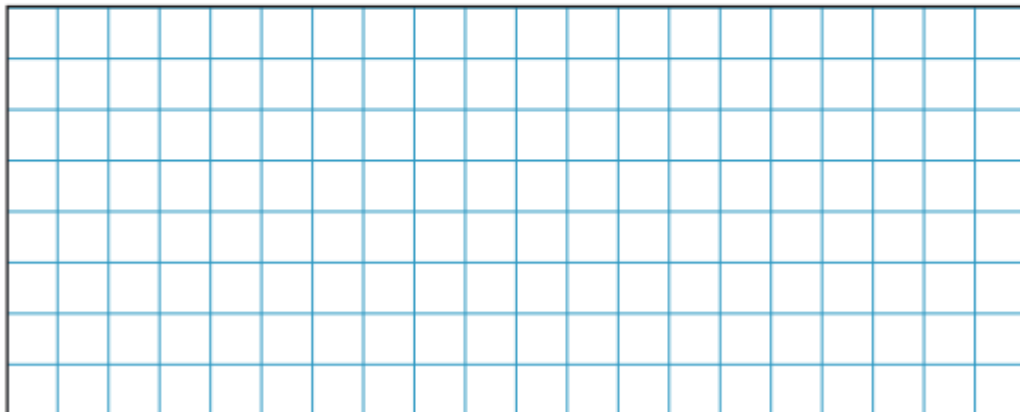
2,000	3,000		5,000
-------	-------	--	-------

	5,400	4,400	3,400
--	-------	-------	-------

1 mark

3. $1,247 + 2,791 = 4,038$

Perform a subtraction to check the answer to the calculation.



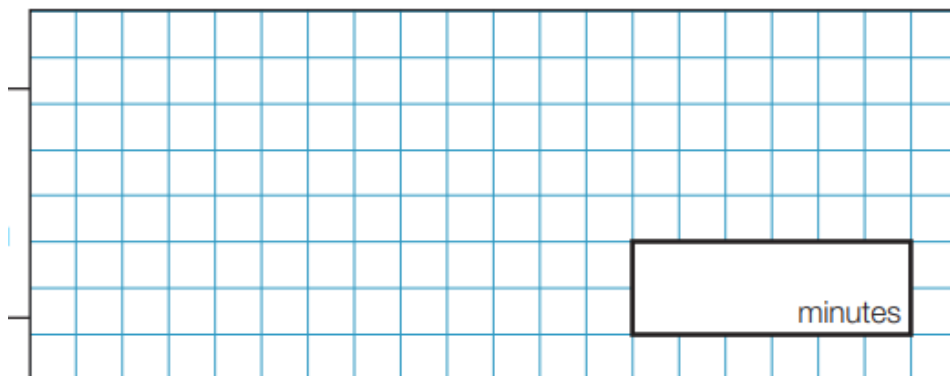
1 mark

Tom plays the flute.

He practises for 34 minutes every day.

How many minutes does he practise in one week?

4.



1 mark

A bookshop sells books at two prices.

5.

Hardback books cost £12.50

Paperback books cost £5.25

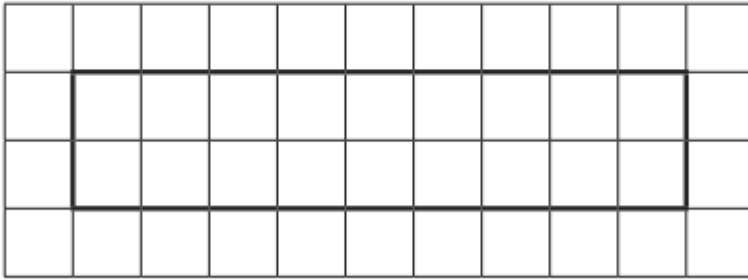
What is the cost of each book to the nearest pound?

Hardback books

Paperback books

2 marks

6. Here is a rectangle drawn on a centimetre square grid.



Shade in $\frac{2}{3}$ of the rectangle.

1 mark

What area have you shaded?

cm²

1 mark

Challenge!

7. On Sunday, Jennifer cycles 15 more miles than she did on Saturday.

In total over the two days she cycles 79 miles.

How many miles does she cycle on Saturday?

miles

2 marks