
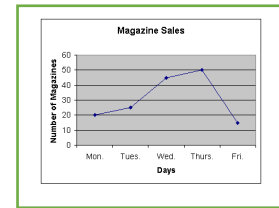


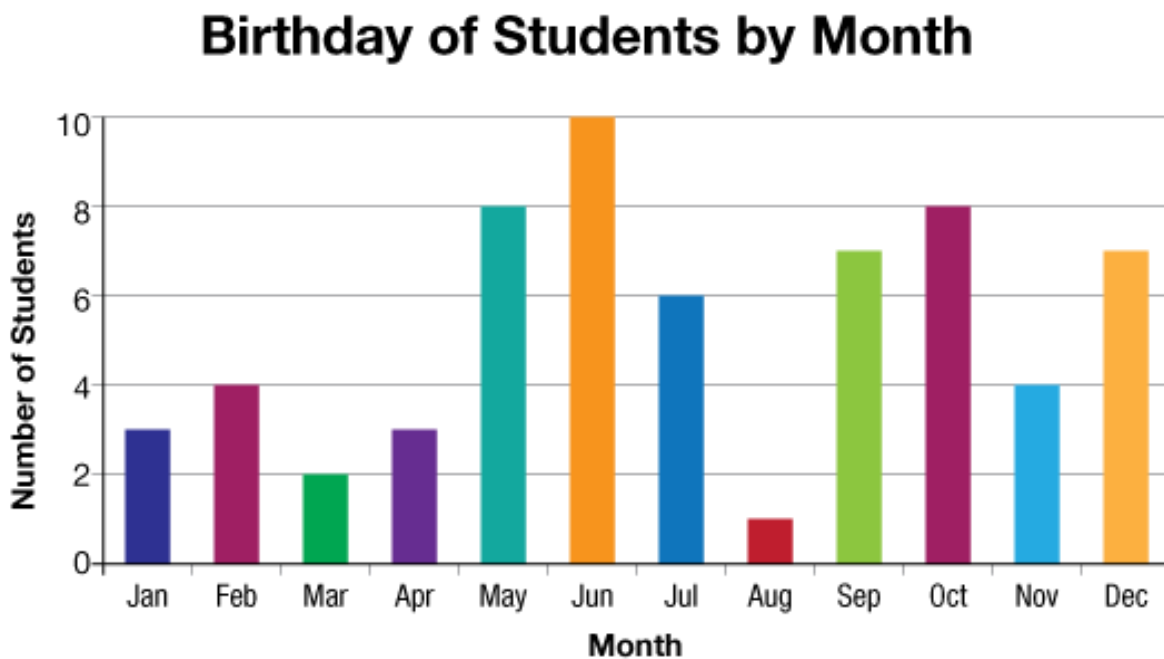
Charts and graphs

1. Match these to their name.

Bar graph
Line graph
Pie chart
Pictograph




2. Look carefully at the bar graph below and then answer the questions.



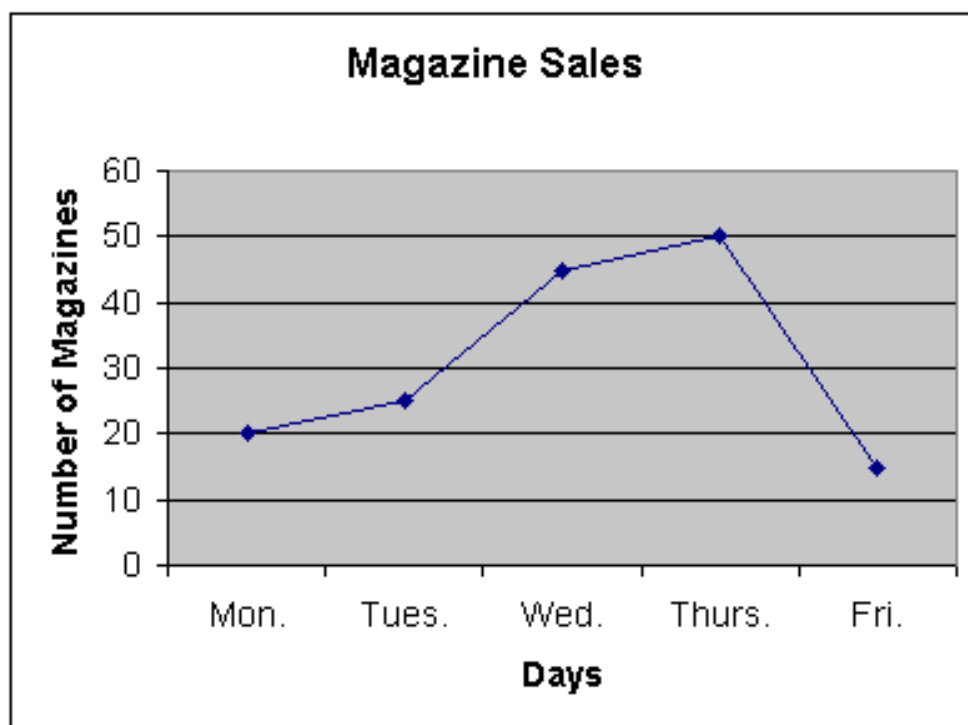
- Which month has the most birthdays?
- How many birthdays are in April?
- What is the least common month for a birthday?
- *How many birthdays have been recorded in total?*

3. Look carefully at the pictograph below and then answer the questions.



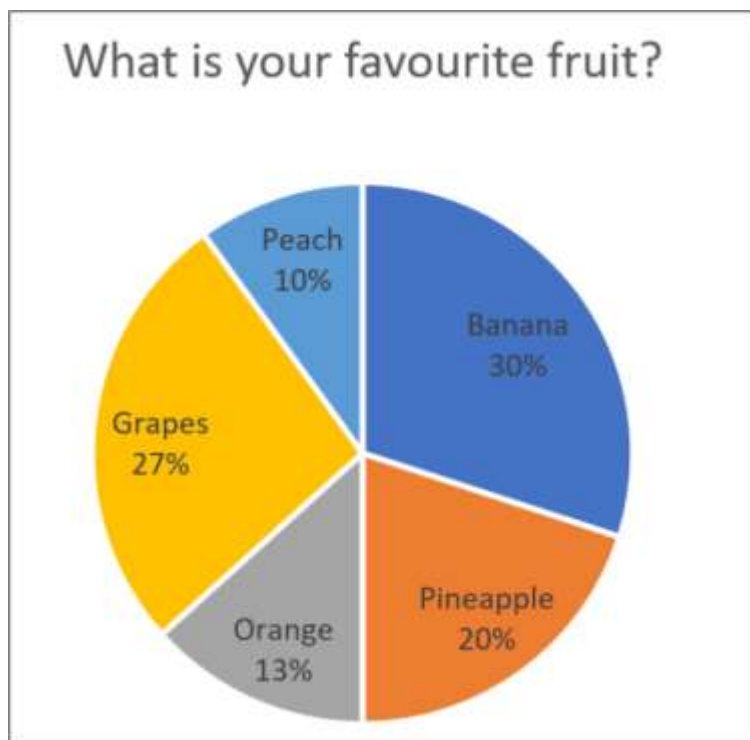
- a) What's the least popular pizza topping?
- b) How many people prefer pepperoni pizza?
- c) Which two toppings had the same amount of votes?
- d) *How many people were asked in total?*

4. Look carefully at the line graph below and then answer the questions.



- a) What is the title of the line graph?
- b) Which day were the most magazines sold?
- c) Which day were the least magazines sold?
- d) *What is the total number of magazines sold on Monday and Thursday?*

5. Look carefully at the pie chart below and then answer the questions.



- a) What is the least popular fruit?
- b) What is the most popular fruit?
- c) What percentage of people prefer orange and grapes?
- d) What percentage of people prefer banana and peach?
- ***e) There were **200** people in this survey.

-How many people liked pineapple the most?

-How many people liked grapes the most?

Challenge

Use the data in this table to create a pictograph

It is very important that you use a ruler.

*Super challenge – can you use a key to show that 1 picture represents 2 piece of fruit?

Favourite fruit

Apple	8
Banana	12
Orange	4
Grapes	10