

Miss Vivian's group

1a. What number do these counters represent?



Add one more tenth.

If you then add another 0.07, what number would you have?



VF

1b. What number do these counters represent?



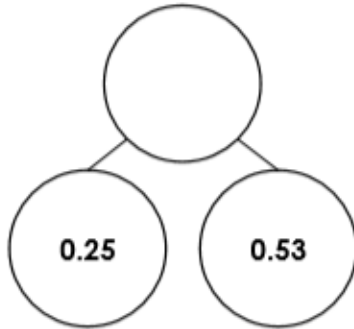
Add one more tenth.

If you then add 0.03, what number would you have?



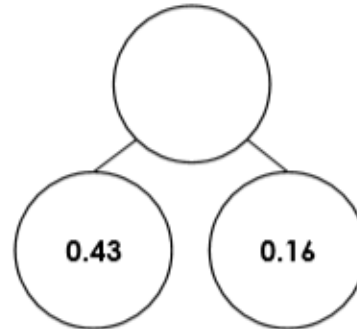
VF

2a. Complete the part whole model.




VF

2b. Complete the part whole model.



VF

3a. Use the square to add 2 hundredths. What is your answer?



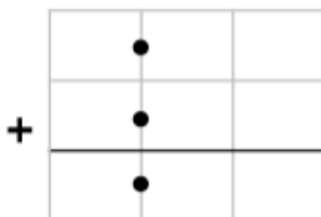
VF

3b. Use the square to add 7 hundredths. What is your answer?



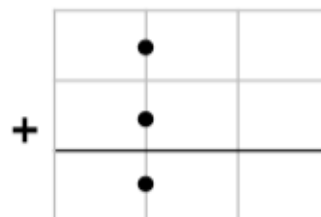
VF

4a. True or false? $0.52 + 0.02 = 7.24$



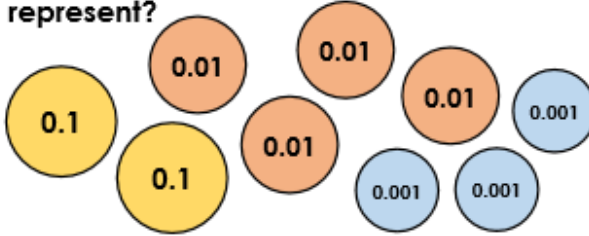
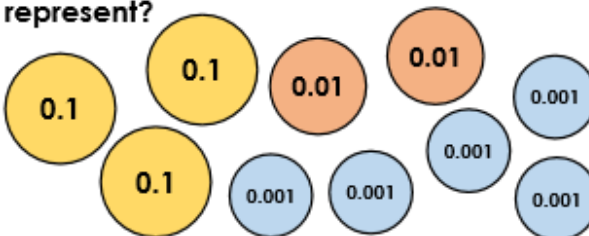
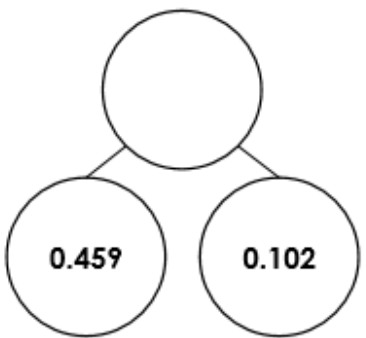
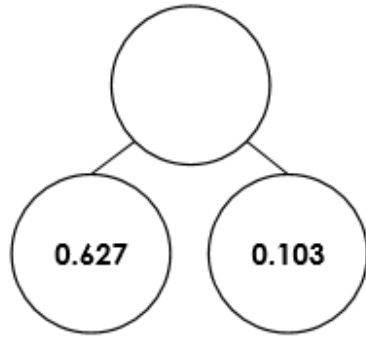

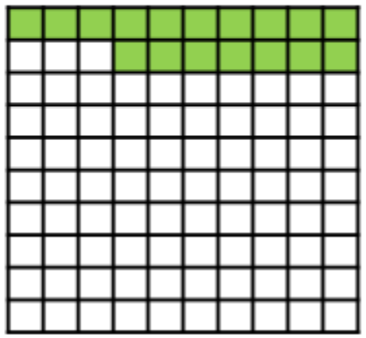
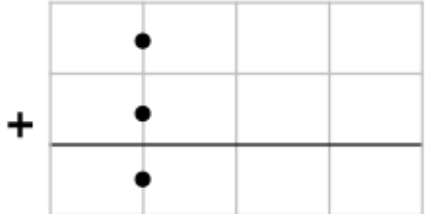
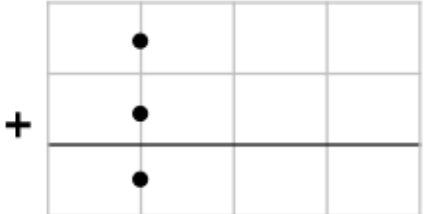
VF

4b. True or false? $0.05 + 0.91 = 0.96$



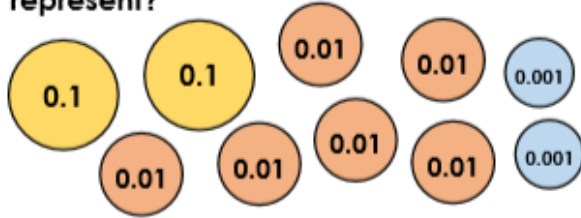
VF

Mrs Adams' group

<p>5a. What number do these counters represent?</p>  <p>0.1 0.01 0.01 0.01 0.001 0.001 0.001</p> <p>Add one hundredth more.</p> <p>If you then add another 0.004, what number would you have?</p> <p>★ VF</p>	<p>5b. What number do these counters represent?</p>  <p>0.1 0.1 0.01 0.01 0.001 0.001 0.001 0.001</p> <p>Add one hundredth more.</p> <p>If you then add another 0.003, what number would you have?</p> <p>★ VF</p>
<p>6a. Complete the part whole model.</p>  <p>0.459 0.102</p> <p>★ VF</p>	<p>6b. Complete the part whole model.</p>  <p>0.627 0.103</p> <p>★ VF</p>
<p>7a. Use the square to add 4 tenths and 5 hundredths. What is your answer?</p>  <p>★ VF</p>	<p>7b. Use the square to add 7 tenths and 3 hundredths. What is your answer?</p>  <p>★ VF</p>
<p>8a. True or false? $0.906 + 0.025 = 0.931$</p>  <p>★ VF</p>	<p>8b. True or false? $0.034 + 0.856 = 0.884$</p>  <p>★ VF</p>

Miss Harris' group (Mr Townsend)

9a. What number do these counters represent?



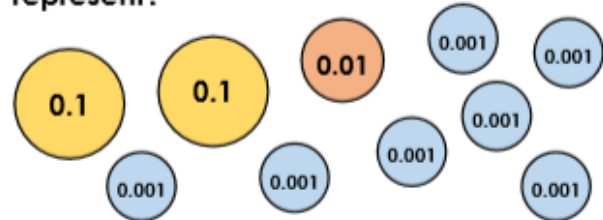
Add on three hundredths.

If you then add another 0.154, what number would you have?



VF

9b. What number do these counters represent?



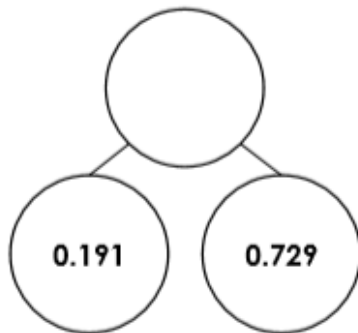
Add on nine hundredths more.

If you then add another 0.058, what number would you have?



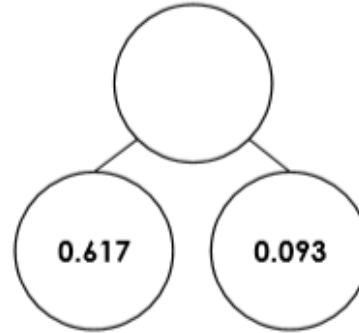
VF

10a. Complete the part whole model.




VF

10b. Complete the part whole model.



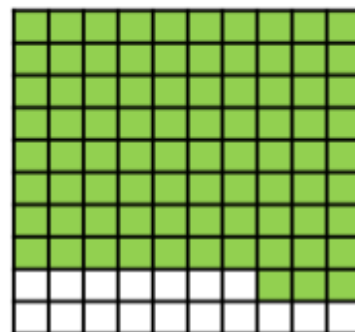
VF

11a. Use the square to add 4 tenths, 9 hundredths. What is your answer?



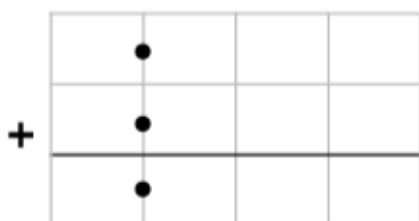
VF

11b. Use the square to add eleven hundredths. What is your answer?



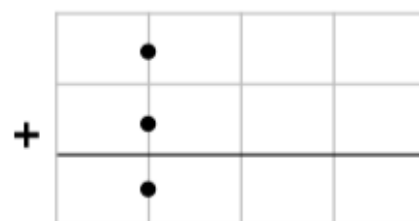
VF

12a. True or false? $0.134 + 0.789 = 0.113$



VF

12b. True or false? $0.604 + 0.298 = 0.902$



VF