


Measure Perimeter

1. Suki is investigating the perimeter of different rectilinear shapes.

I need to draw a shape that has twice the perimeter of shape A.




Explore the different rectilinear shapes that you could draw to help Suki.

DP


2. Measure the perimeter of the shapes below and complete the inequality statement.



<



>



Is there more than one solution?

DP