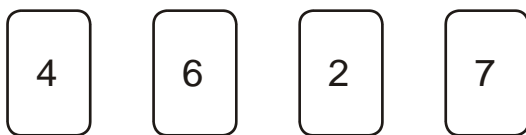


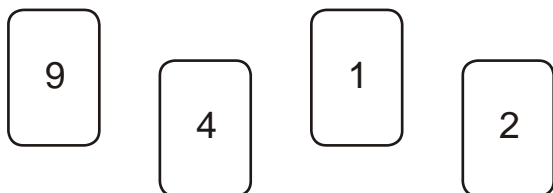
1. Here are four digit cards.



Use all four digit cards to make this sum correct.


$$\square\square + \square\square = 100$$

2. Here are four digit cards.



Use each digit card **once** to make the decimal number **nearest to 20**


$$\square\square.\square\square$$

3. Here are some digit cards.



Write **all** the **three-digit** numbers, **greater than 500**, that can be made using these cards.

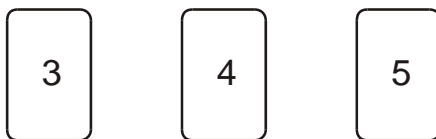
One has been done for you.




626

.....
.....

4. Use **each** number card **once** to make the answer to each calculation an **even** number.

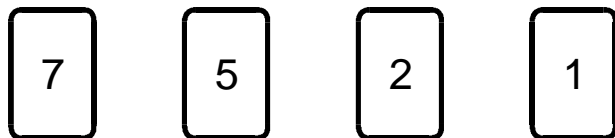


 5 ×

12 ÷

9 +

5. Here are four digit cards.

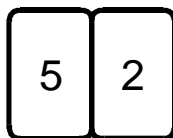


Choose two cards each time to make the following two-digit numbers.

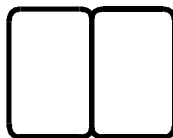
The first one is done for you.



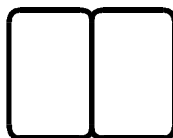
an even number



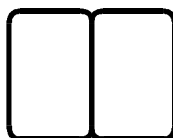
a multiple of 9



a square number

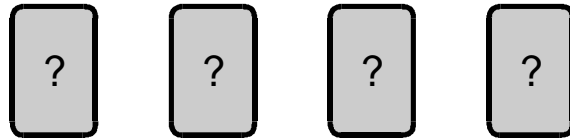


a factor of 96



6. Debbie has a pack of cards numbered from 1 to 20

She picks four different number cards.




Exactly three of the four numbers are multiples of 5


Exactly three of the four numbers are even numbers.

All four of the numbers add up to less than 40

Write what the numbers could be.



7.



Choose **three** of these number cards to make an **even** number that is **greater than 400**

